

# MATHS

## MONDAY



This diagram shows two see-through sheets. You place the sheets on top of each other. Which pattern do you get?



# MATHS

## MONDAY

How many ducks weigh the same as a crocodile?



(A)



(B)



(C)



(D)



(E)

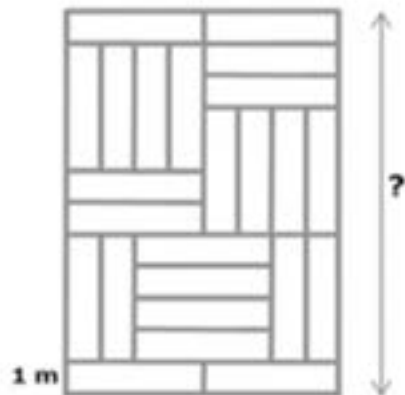


# MATHS

## MONDAY

The floor of a room is covered with equally big rectangular tiles (see picture).

How long is the room?



- (A) 6m (B) 8m (C) 10m (D) 11m (E) 12m

# MATHS

## MONDAY

Grandma stands in the courtyard calling her cat and all her chickens. After a little while 20 legs are running towards her.

How many chickens does Grandma have?

- (A) 11   (B) 9   (C) 8   (D) 6   (E) 4