

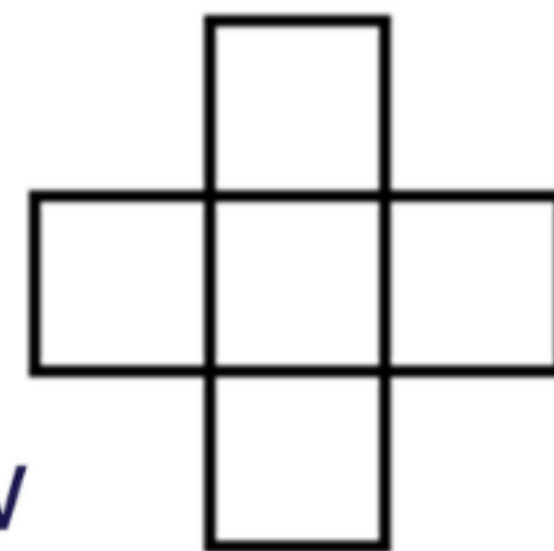
M A T H S



MONDAY



The numbers 1, 2, 3, 4 and 9 are written into the squares on the following figure. The sum of the three numbers in the horizontal row should be the same as the sum of the three numbers in the vertical column. Which number is written in the middle?



- (A) 1 (B) 2 (C) 3 (D) 4 (E) 9

MATHS



MONDAY



Eva has the 5 stickers shown:
She stuck one of them on each
of the 5 squares of this board
so that is not on square 5,
 is on square 1, and is
adjacent to and .



1	2	3	4	5
---	---	---	---	---

On which square did Eva stick ?

- (A) 1 (B) 2 (C) 3 (D) 4 (E) 5

MATHS



MONDAY

How many dots would be in the 7th row?

1st row:

•

2nd row:

• • •

3rd row:

• • • • •

4th row:

• • • • • • •

(A)

7

(B)

10

(C)

11

(D)

13

(E)

15

M

A

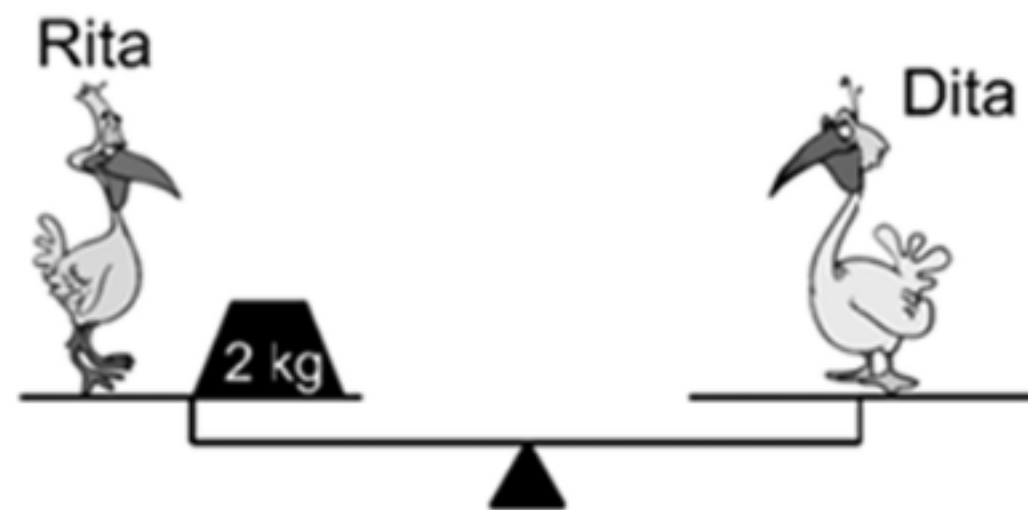
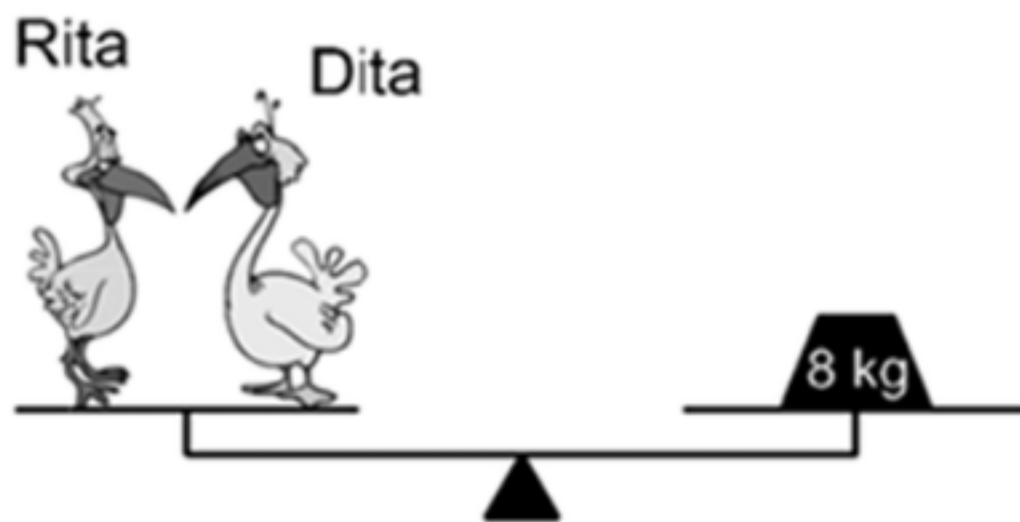
T

H

S

MONDAY

How much does Dita weigh?




- (A) 2kg (B) 3kg (C) 4kg (D) 5kg (E) 6kg

M A T H S

MONDAY

How many dots are in the picture?



- (A) 180
- (B) 181
- (C) 182
- (D) 183
- (E) 265